

Garden City Second Grade



Remote Learning Packet #2
April 8, 9, 14, 15, 16

Day 1

Wednesday, April 8, 2020





Daily Reading

April 8, 2020

- Read "The Butterfly Lifecycle" Reading A to Z
- <https://www.raz-plus.com/books/leveled-books/book/?id=2783&langld=1>
- Write down 5 facts you learned about the butterfly life cycle.

Spelling Practice Review-Contractions

Write each spelling word 3 times.

1. you'll _____

2. he's _____

3. wasn't _____

4. don't _____

5. we're _____

6. I'll _____

7. isn't _____

8. she's _____

9. what's _____

10. you're _____

Practice writing a sentence using one of our spelling words.



Daily Journal Writing

April 8, 2020

Today's Prompt

For what are you thankful?

- Tell at least three people or things you are thankful for and explain why.

Write one paragraph to answer this prompt. Be sure to write:

- 1 topic sentence
- 4-6 detail sentences
- 1 closing sentence

Use the lined paper in your packet or your own sheet of paper.

Check your work!

- Read your writing back to yourself. Does it make sense?
- Spell 2nd grade words correctly.
- Capitalize sentences, names of people, and names of places.
- Include punctuation at the ends of all sentences.
(periods, question marks, exclamation points)
- Use the correct verb tense. (past, present, or future)

Name : _____

Score : _____

Teacher : _____

Date : _____

$$\begin{array}{r} 52 \\ + 89 \\ \hline \end{array}$$

$$\begin{array}{r} 43 \\ + 40 \\ \hline \end{array}$$

$$\begin{array}{r} 50 \\ + 78 \\ \hline \end{array}$$

$$\begin{array}{r} 43 \\ + 58 \\ \hline \end{array}$$

$$\begin{array}{r} 84 \\ + 23 \\ \hline \end{array}$$

$$\begin{array}{r} 72 \\ + 27 \\ \hline \end{array}$$

$$\begin{array}{r} 44 \\ + 32 \\ \hline \end{array}$$

$$\begin{array}{r} 70 \\ + 69 \\ \hline \end{array}$$

$$\begin{array}{r} 27 \\ + 73 \\ \hline \end{array}$$

$$\begin{array}{r} 24 \\ + 18 \\ \hline \end{array}$$

$$\begin{array}{r} 75 \\ + 33 \\ \hline \end{array}$$

$$\begin{array}{r} 46 \\ + 84 \\ \hline \end{array}$$

When solving word problems remember CUBES!

C - circle numbers

U - underline the question

B - box the key word

E - write your equation

S - solve the problem

Day 1 4/8/20	Darren collected 19 rocks on Tuesday. He collected 23 more rocks the next day. How many rocks did Darren collect <u>in all</u> ?
Day 2 4/9/20	There was a group of 41 turtles swimming in the sea. 26 turtles swam away. How many turtles <u>were left</u> swimming in the group?
Day 3 4/14/20	There are 612 people on the first floor of the mall. There are 243 people on the second floor of the mall. How many people are on <u>both</u> the first and second floor of the mall?
Day 4 4/15/20	Kyle is collecting stamps. He has 335 American stamps and 249 Canadian stamps. How many stamps does Kyle have <u>altogether</u> ?
Day 5 4/16/20	Sara went to the grocery store at 10:30 am. She was in the store for 2 hours and 30 minutes. What <u>time</u> did she leave the store?
Day 6 4/21/20	Molly counted 484 red bricks and 267 blue bricks on a house. <u>How many more</u> red bricks did Molly count?
Day 7 4/22/20	Nate had 2 piles of coins. The first pile had 516 coins in it. The second pile had 394 coins in it. How many <u>fewer</u> coins were in the second pile?
Day 8 4/23/30	Felix found a collection of coins in an old coat pocket. He found 2 quarters, 4 dimes, 2 nickels, and 5 pennies. What is the <u>total amount</u> Felix found?
Day 9 4/28/20	Jerry spent \$238 at Walmart. Amy spent \$194 at Target. What is the <u>total</u> amount Jerry and Amy spent <u>together</u> ?
Day 10 4/29/20	Kristina sold \$363 worth of Girl Scout Cookies. Alex sold \$291 worth of Girl Scout Cookies. What is the <u>difference</u> in the amount of money the girls sold?
Day 11 4/30/20	Ben's family went for a walk around the neighborhood. They started walking at 1:30 pm and ended at 3:00 pm. How long did Ben's family walk? (Answer in <u>hours and minutes</u>)

Day 2

Thursday, April 9, 2020





Daily Reading

April 9, 2020

- Reread "The Butterfly Lifecycle" Reading A to Z
- <https://www.raz-plus.com/books/leveled-books/book/?id=2783&langld=1>
- Complete the comprehension quiz

Name

The Butterfly Life Cycle

1. What happens before a new butterfly rests?

- a) Its wings are wet and folded against its body.
- b) Blood pumping into the wings causes them to unfold and spread out.
- c) The sun and air dry its delicate wings.
- d) It flies off to eat.

2. Read the sentence: They are covered in scales. Scales are .

- a) immature plates
- b) immature insects
- c) partners
- d) flat plates

3. Which of the following happens first?

- a) The new butterfly rests.
- b) A butterfly sips sweet liquid from flowers.
- c) An adult butterfly comes out of its shell.
- d) Females lay eggs.

4. What process does the author want to explain?

- a) periods in time
- b) changes in season
- c) stages in life
- d) phases of insects

5. Which of the following is a fact from the section titled "Egg"?
- a) Females do all of the work.
 - b) The egg hatches in three to twelve days.
 - c) There are too many eggs on each leaf.
 - d) The caterpillar doesn't eat enough food.
6. Why does the caterpillar eat constantly?
- a) It needs to make a hard shell for its pupa stage.
 - b) It competes with other caterpillars.
 - c) It needs to grow wings to become a butterfly.
 - d) It needs a lot of food to grow.
7. What step comes after the caterpillar stage?
- a) pupa
 - b) egg
 - c) adult caterpillar
 - d) adult butterfly
8. The caterpillar sheds its skin many times so it can
- a) eat the old skin
 - b) grow larger
 - c) have bright green skin
 - d) hang from a branch
9. What is the main similarity between a caterpillar and a butterfly?
- a) They both fly.
 - b) They both sip sweet liquid from flowers.
 - c) They both undergo changes.
 - d) They both eat leaves.

Contraction Match

A contraction is made when 2 words are joined together. Match each contraction to the correct words.

1. you'll _____

2. he's _____

3. wasn't _____

4. don't _____

5. we're _____

6. I'll _____

7. isn't _____

8. what's _____

9. she's _____

10. you're _____

A. she is

B. was not

C. you will

D. you are

E. is not

F. he is

G. do not

H. I will

I. what is

J. we are



Daily Journal Writing

April 9, 2020

Today's Prompt

You found a magic wand! What would you do with your magic wand?

- Write a story telling what you would do with your magic wand.
- Be sure your story has a beginning, middle, and end.
- Use transition words. (Words like *first*, *next*, *then*, *after*, *last*, *finally*)


Write one paragraph to answer this prompt. Be sure to write:

- 1 topic sentence
- 4-6 detail sentences
- 1 closing sentence

Use the lined paper in your packet or your own sheet of paper.

Check your work!

- Read your writing back to yourself. Does it make sense?
- Spell 2nd grade words correctly.
- Capitalize sentences, names of people, and names of places.
- Include punctuation at the ends of all sentences.
(periods, question marks, exclamation points)
- Use the correct verb tense. (past, present, or future)



Name : _____

Score : _____

Teacher : _____

Date : _____

$$\begin{array}{r} 34 \\ - 28 \\ \hline \end{array}$$

$$\begin{array}{r} 72 \\ - 63 \\ \hline \end{array}$$

$$\begin{array}{r} 71 \\ - 52 \\ \hline \end{array}$$

$$\begin{array}{r} 73 \\ - 34 \\ \hline \end{array}$$

$$\begin{array}{r} 44 \\ - 18 \\ \hline \end{array}$$

$$\begin{array}{r} 72 \\ - 24 \\ \hline \end{array}$$

$$\begin{array}{r} 92 \\ - 33 \\ \hline \end{array}$$

$$\begin{array}{r} 53 \\ - 35 \\ \hline \end{array}$$

$$\begin{array}{r} 34 \\ - 27 \\ \hline \end{array}$$

$$\begin{array}{r} 75 \\ - 16 \\ \hline \end{array}$$

$$\begin{array}{r} 33 \\ - 19 \\ \hline \end{array}$$

$$\begin{array}{r} 81 \\ - 35 \\ \hline \end{array}$$



Day 3

Tuesday, April 14, 2020





Daily Reading
April 14, 2020

- Read "Tarantula" Reading A to Z
- https://www.raz-plus.com/books/leveled-books/book/?id=1703&lang_id=1
- Write down 5 facts you learned about Tarantulas

Spelling/ Phonics Review- Digraph 'ie'

A digraph is when 2 letters are joined together to make one sound.


ch <u>ief</u>	th <u>ief</u>
n <u>ie</u> ce	bel <u>ie</u> ve
f <u>ie</u> ld	goal <u>ie</u>
br <u>ie</u> f	pl <u>ie</u>
pl <u>ie</u> ce	tl <u>ie</u>

Common digraphs- sh, ch, wh, th, ph

The 2 letters in the digraph will no longer say their own sound. They will say the same but new sound.

When 'ie' are together in a word they will make a new sound. They will now say either the long (e) or the long (i) sound.

*** PRACTICE: Circle the digraph 'ie' in each of the words above. Listen to see if it says the long (i) or long (e) sound. Practice reading the words 5 more times.



Daily Journal Writing

April 14, 2020

Today's Prompt

What groceries (foods) would you like from the store?

- Write a persuasive letter to a parent.
- Tell them at least 2 foods you would like them to buy.
- Tell why you want those foods.
- Give your parent good reasons for buying those foods. (Why should *they* want to buy them for you?)


Write one paragraph to answer this prompt. Be sure to write:

- 1 topic sentence
- 4-6 detail sentences
- 1 closing sentence

Use the lined paper in your packet or your own sheet of paper.

Check your work!

- Read your writing back to yourself. Does it make sense?
- Spell 2nd grade words correctly.
- Capitalize sentences, names of people, and names of places.
- Include punctuation at the ends of all sentences.
(periods, question marks, exclamation points)
- Use the correct verb tense. (past, present, or future)



Name : _____

Score : _____

Teacher : _____

Date : _____

$$\begin{array}{r} 121 \\ + 510 \\ \hline \end{array}$$

$$\begin{array}{r} 952 \\ + 628 \\ \hline \end{array}$$

$$\begin{array}{r} 566 \\ + 966 \\ \hline \end{array}$$

$$\begin{array}{r} 553 \\ + 877 \\ \hline \end{array}$$

$$\begin{array}{r} 643 \\ + 856 \\ \hline \end{array}$$

$$\begin{array}{r} 121 \\ + 178 \\ \hline \end{array}$$

$$\begin{array}{r} 874 \\ + 948 \\ \hline \end{array}$$

$$\begin{array}{r} 218 \\ + 377 \\ \hline \end{array}$$

$$\begin{array}{r} 477 \\ + 600 \\ \hline \end{array}$$

$$\begin{array}{r} 388 \\ + 839 \\ \hline \end{array}$$

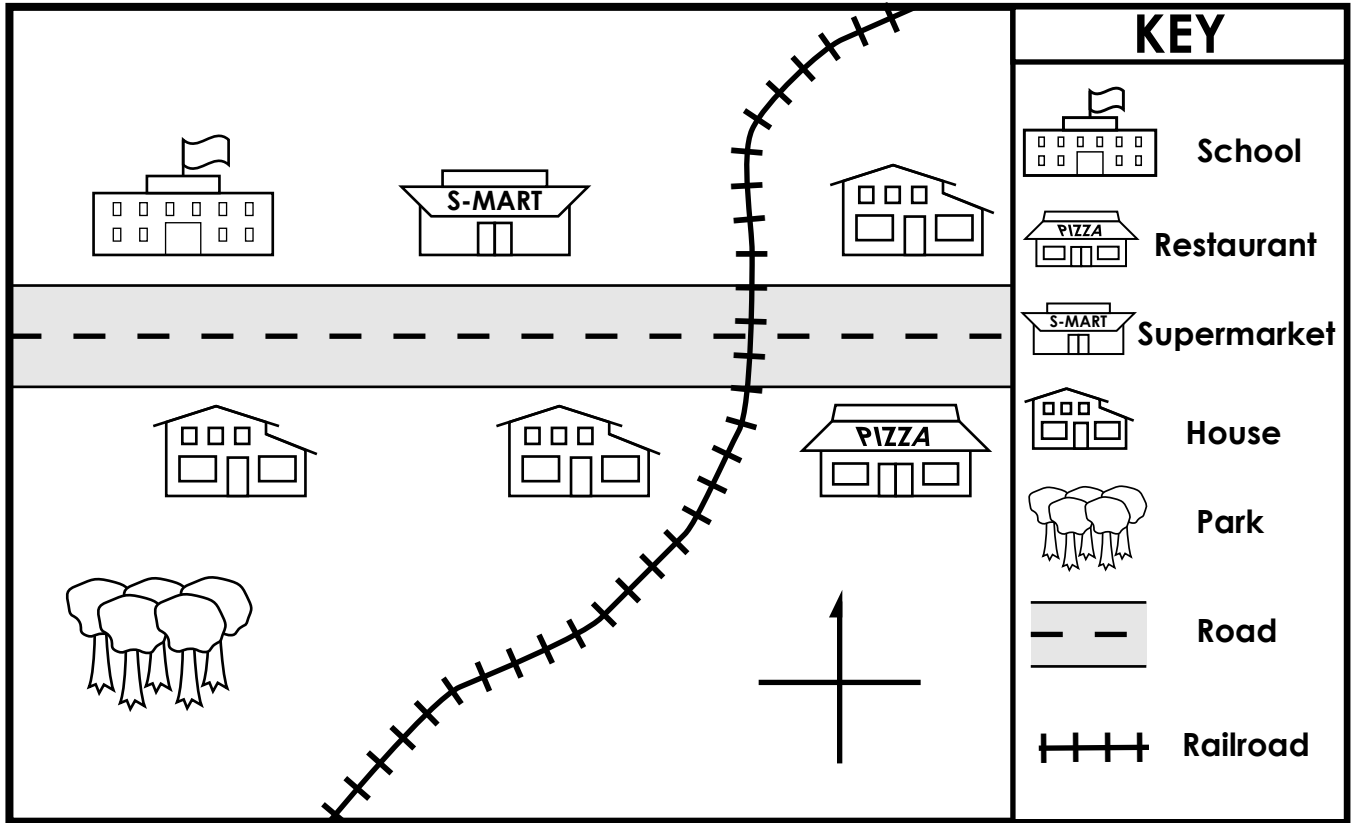
$$\begin{array}{r} 912 \\ + 938 \\ \hline \end{array}$$

$$\begin{array}{r} 181 \\ + 471 \\ \hline \end{array}$$

Name: _____

Reading a Map

Davis Street



Underline the map title.

Write **N**, **S**, **W**, and **E** on the compass rose.

Label the road **Davis Street**.

Trace the railroad with **purple**.

Color the park **green**.

Color the school **red**.

Color the supermarket **brown**.

Color the restaurant **yellow**.

Color the houses south of the road **blue**.

Color the house east of the railroad **orange**.

Day 4

Wednesday, April 15, 2020





Daily Reading
April 15, 2020

- Reread "Tarantula" Reading A to Z
- https://www.raz-plus.com/books/leveled-books/book/?id=1703&lang_id=1
- Complete the comprehension quiz

Tarantula

1. The author wrote this book to .
 - a) entertain the reader with funny facts about tarantulas
 - b) persuade the reader to keep a tarantula for a pet
 - c) inform the reader about tarantulas
 - d) none of the above

2. The author includes photos in the book to show .
 - a) different types of tarantulas
 - b) how tarantulas eat
 - c) tarantulas' body parts
 - d) all of the above

3. When a tarantula's skin gets too tight, .
 - a) it splits, and the spider pushes out of it
 - b) the spider dies
 - c) it splits, and the new skin stays soft
 - d) it gets eaten by other spiders

4. Tarantulas live in
 - a) deserts
 - b) forests
 - c) warm places
 - d) all of the above

5. What does a tarantula do first when hunting prey?
 - a) It drags the prey back home.
 - b) It jumps and jabs its fangs into the animal.
 - c) It sucks up a tasty meal.
 - d) It shoots venom into the animal.

6. Read this sentence: Tarantulas are **harmless** if you leave them alone. **Harmless** means
 - a) slow and calm
 - b) looking for a fight
 - c) scared
 - d) not dangerous

7. A tarantula uses its hairs to

- a) sense heat and cold
- b) sting enemies
- c) climb trees
- d) all of the above

8. Which of the following details is true about tarantulas?

- a) They are the largest spiders in the world.
- b) They do not eat other spiders.
- c) They hunt during the day.
- d) They never outgrow their skin.

9. Which of the following is an opinion?

- a) Tarantulas are important to the balance of nature.
- b) People are a big danger to tarantulas.
- c) Tarantulas are the most interesting spiders.
- d) There are more than fifty kinds of tarantulas in the United States.

Spelling Practice

Write each word 3 times

chief _____

niece _____

field _____

brief _____

piece _____

thief _____


believe _____

goalie _____

pie _____

tie _____

Write a sentence using one of the words from the list.



Daily Journal Writing

April 15, 2020

Today's Prompt

What is something you would like to learn more about?

- Tell one topic you would like to learn more about.
- What do you already know about this topic?
- What questions do you still have?
- Where could you find more information to help you learn?


Write one paragraph to answer this prompt. Be sure to write:

- 1 topic sentence
- 4-6 detail sentences
- 1 closing sentence

Use the lined paper in your packet or your own sheet of paper.

Check your work!

- Read your writing back to yourself. Does it make sense?
- Spell 2nd grade words correctly.
- Capitalize sentences, names of people, and names of places.
- Include punctuation at the ends of all sentences.
(periods, question marks, exclamation points)
- Use the correct verb tense. (past, present, or future)



Name : _____

Score : _____

Teacher : _____

Date : _____

$$\begin{array}{r} 405 \\ + 629 \\ \hline \end{array}$$

$$\begin{array}{r} 628 \\ + 874 \\ \hline \end{array}$$

$$\begin{array}{r} 601 \\ + 188 \\ \hline \end{array}$$

$$\begin{array}{r} 825 \\ + 293 \\ \hline \end{array}$$

$$\begin{array}{r} 571 \\ + 714 \\ \hline \end{array}$$

$$\begin{array}{r} 687 \\ + 789 \\ \hline \end{array}$$

$$\begin{array}{r} 680 \\ + 890 \\ \hline \end{array}$$

$$\begin{array}{r} 776 \\ + 676 \\ \hline \end{array}$$

$$\begin{array}{r} 861 \\ + 163 \\ \hline \end{array}$$

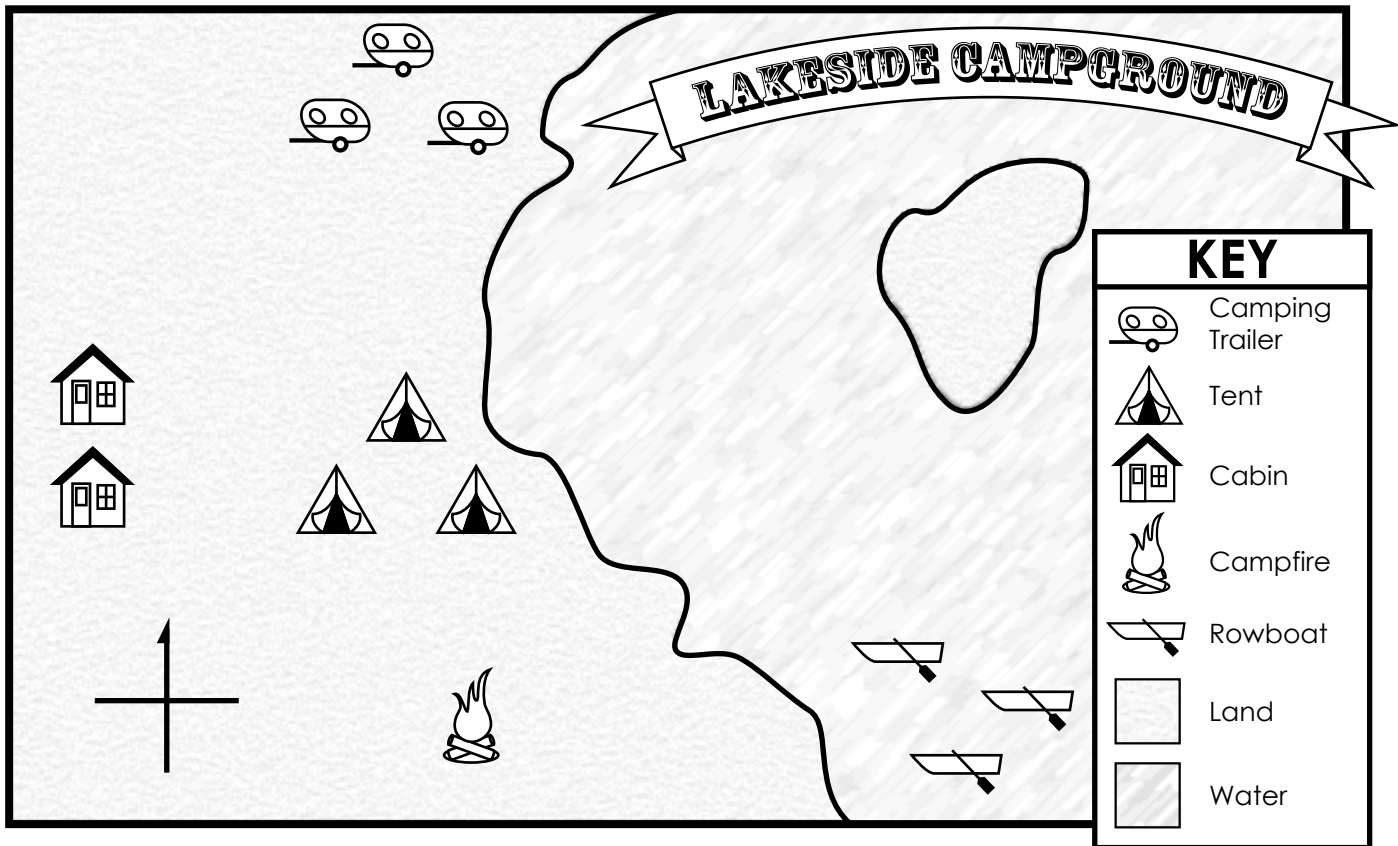
$$\begin{array}{r} 170 \\ + 598 \\ \hline \end{array}$$

$$\begin{array}{r} 629 \\ + 730 \\ \hline \end{array}$$

$$\begin{array}{r} 358 \\ + 412 \\ \hline \end{array}$$

Name: _____

Reading a Map



1. Label **N**, **S**, **E**, and **W** on the compass rose.
2. Color the land **green** and the water **blue**.

Write **north**, **south**, **east**, or **west** to complete each sentence.

3. The rowboats are _____ of the campfire.
4. The camping trailers are _____ of the tents.
5. The cabins are _____ of the tents.
6. The campfire is _____ of the camping trailers.
7. The island is _____ of the cabins.

Day 5

Thursday, April 16, 2020





Daily Reading
April 16, 2020


- Read a book of your choice that you have at home or online on Epic
- <https://www.getepic.com> (Parents can use Epic for free right now.)
- Write down the title, characters, setting, problem and solution

Phonics Practice

Sort the list of words. Practice reading each word and listen to the digraph sound. Sort the words by the long vowel sound they say.

chief thief niece believe field
goalie brief pie piece tie

long (i) sound	long (e) sound



Daily Journal Writing

April 16, 2020

Today's Prompt

What is something you love about yourself?

- Tell at least one thing you love about yourself?
- How does it make you feel to think about this part of yourself?
- Why do you love this part of yourself?


Write one paragraph to answer this prompt. Be sure to write:

- 1 topic sentence
- 4-6 detail sentences
- 1 closing sentence

Use the lined paper in your packet or your own sheet of paper.

Check your work!

- Read your writing back to yourself. Does it make sense?
- Spell 2nd grade words correctly.
- Capitalize sentences, names of people, and names of places.
- Include punctuation at the ends of all sentences.
(periods, question marks, exclamation points)
- Use the correct verb tense. (past, present, or future)



Daily Math Review – Week #1 – Monday

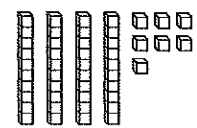
Name: _____ Date: _____

Ⓐ Fill in the missing sign: $<$, $>$, or $=$.

Double 5 _____ 12 $3+9$ _____ $4+8$

16 _____ $8+8$ $5+9$ _____ $6+7$

Ⓑ What is this number?



_____ + _____ = _____


Ⓒ Look at this number: 92

How many ones are there? _____

How many tens are there? _____

Is it even or odd? _____

Ⓓ How much money?



_____ ¢

Ⓔ Solve these problems:

$9 + 9 =$ _____ $8 + 5 - 4 =$ _____

$8 - 5 + 3 - 4 =$ _____ $12 + 8 =$ _____

Ⓕ Circle the even numbers:

82 69 57 36 10 24 71 95

Ⓖ Fill in the missing numbers:

36, 38, 40, 42, _____, _____, 48, 50, _____, 54

47, 46, 45, 44, _____, _____, 41, 40, 39, _____

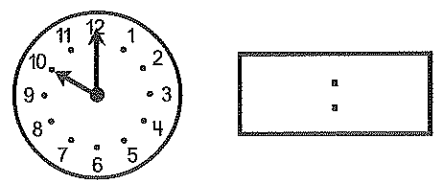
Ⓖ Answer these questions:

What number is one more than 84? _____

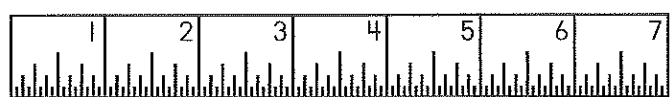
What number is five more than 65? _____

What number is ten less than 70? _____

Ⓘ What time is it?

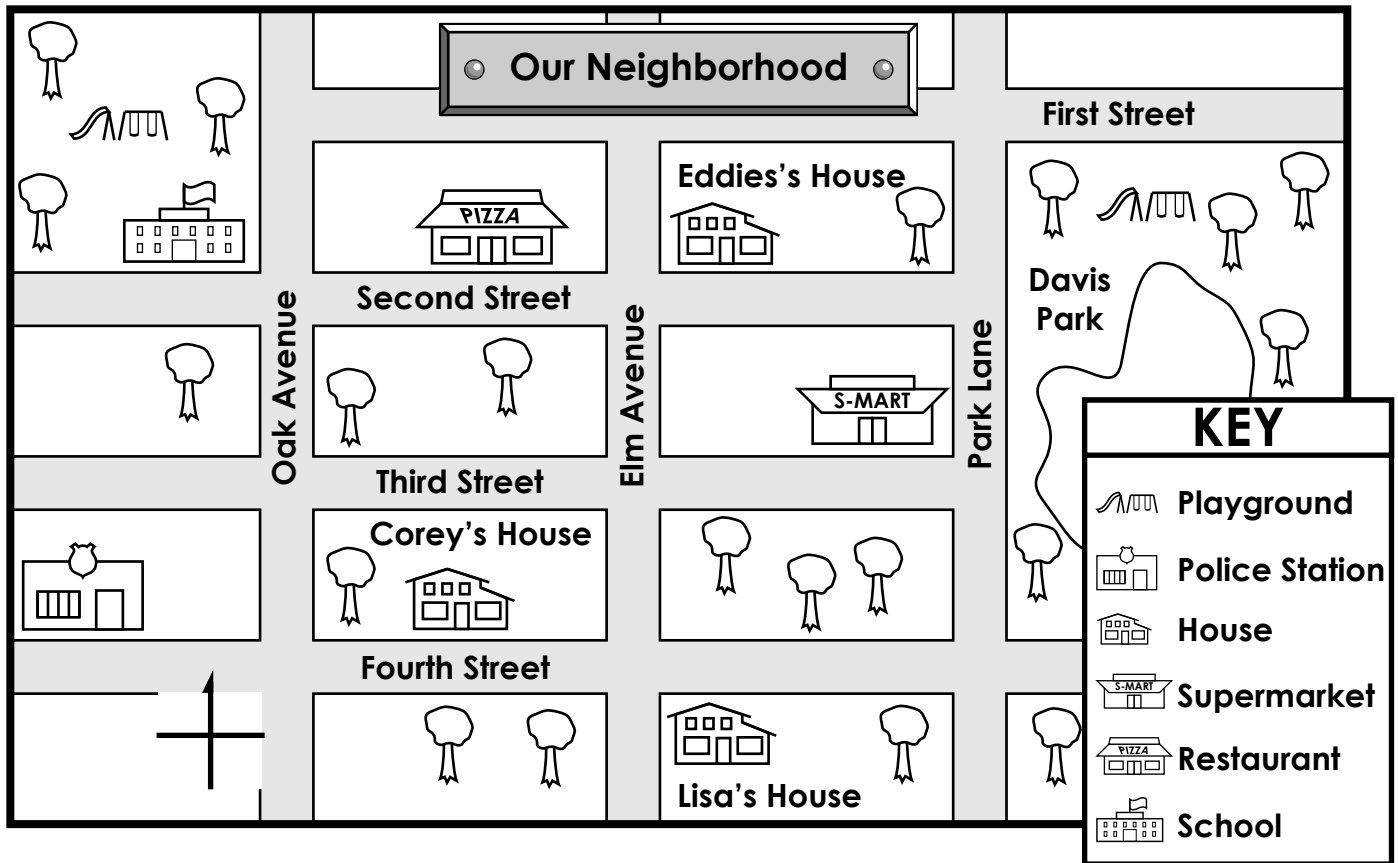


Ⓙ How long is the line? _____ in.



Name: _____

Reading a Map



1. Label **N**, **S**, **E**, and **W** on the compass rose.

Write **north**, **south**, **east**, or **west** to complete each sentence.

- To go from Eddie's house to the school, you travel _____.
- The supermarket is _____ of Lisa's house.
- A police officer would go _____ to Davis Park.
- Students walk _____ to the school after using the school playground.
- Corey goes _____ to eat at the restaurant.
- Eddie would walk _____ to use the Davis Park playground.
- Eddie would walk _____ to visit Lisa.